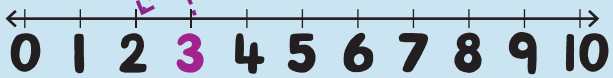


Taking away 1 number



What is 1 less? Trace with a pencil and write the answer.

Start at 3. Take away 1.



leaves

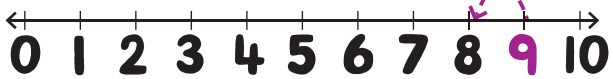
2

Start at 5. Take away 1.



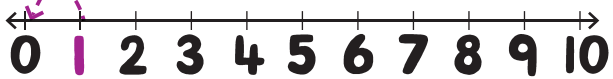
leaves

Start at 9. Take away 1.



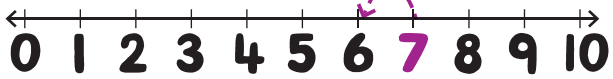
leaves

Start at 1. Take away 1.



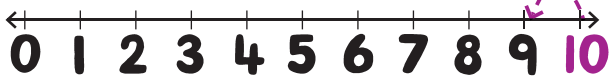
leaves

Start at 7. Take away 1.



leaves

Start at 10. Take away 1.



leaves

The dotted line will help you.



Take away 1.

5 take away 1 leaves

3 take away 1 leaves

8 take away 1 leaves

2 take away 1 leaves

7 take away 1 leaves

4 take away 1 leaves

10 take away 1 leaves

9 take away 1 leaves

6 take away 1 leaves



Play with counting back.

Make a model spaceship. Count backwards from 10 to 'Lift off!'

Learn the song *Ten Green Bottles*.

Play Snakes and Ladders with a friend.



You can also write $3 - 1 = 2$.

